



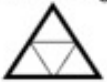


Sunday	Monday	Tuesday	Wednesday	Thursday	Friday	Saturday
 JULY 2025 		1 Write this number in standard form. $900 + 10 + 8$	2 What number is 100 more than 379?	3 Solve. $\begin{array}{r} 341 \\ + 156 \\ \hline \end{array}$	4 Solve. $\begin{array}{r} 583 \\ - 519 \\ \hline \end{array}$	5 Which is a better estimate for the length of a bed? 2 m, 5 m, or 9 m
6 True or false? A pentagon has more angles than a quadrilateral.	7 Is the sum of $6+6$ an even number or an odd number?	8 Write this number in word form. 246	9 Count forward by fives: 595, ____, ____, ____	10 Solve. $\begin{array}{r} 672 \\ + 218 \\ \hline \end{array}$	11 Solve. $\begin{array}{r} 922 \\ - 146 \\ \hline \end{array}$	12 What time is it? 
13 What is the name for the equal parts of this circle? 	14 Which of these numbers are even? 6, 12, 14, 17, 19	15 What is the value of the underlined digit? $\underline{4}97$	16 What is the missing number? 160, ____, 360, 460	17 Solve. $43 + 18 + 31 + 65$	18 What is seven hundred fifty-four minus two hundred eighty-two?	19 Measure the line to the nearest centimeter. 
20 A rectangle is covered by 2 rows and 5 columns of square tiles. How many square tiles are there?	21 Find the unknown. $4 + ? = 11$	22 Write this number in standard form. 5 ones 7 hundreds	23 What number is 10 less than 107?	24 Which sum is less? $64 + 839$ $407 + 498$	25 Kew Bakery sold 136 cookies on Monday and 302 cookies on Tuesday. How many more cookies were sold on Tuesday?	26 You have 1 quarter, 2 dimes, 1 nickel, and 8 pennies. How many more cents do you need to make one dollar?
27 What is the name for the equal parts of this triangle? 	28 Find the unknown. $? + 8 = 17$	29 Which number is less? 564 or 562	30 What is the missing number? 885, 895, ____, 915	31 Dan has 463 points. Devon has 298 more points than Dan. How many points does Devon have?	MATH REVIEW OF THE DAY 